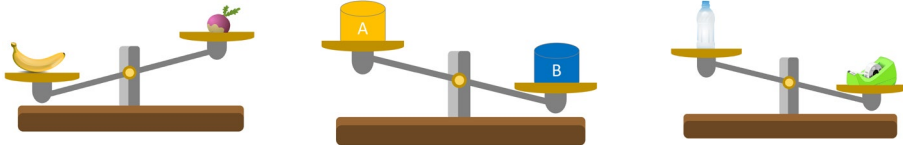


Masses

Séance 60

→ Entoure l'objet le plus lourd.




→ Coche la réponse indiquant la masse de chaque objet.




- ☐ 10 g
- ☐ 100 g
- ☐ 1 kg
- ☐ 10 kg



- ☐ 1 kg
- ☐ 100 g
- ☐ 10 g
- ☐ 1 g



- ☐ 15 kg
- ☐ 150 g
- ☐ 150 kg
- ☐ 1 kg



- ☐ 1 100 g
- ☐ 1 100 kg
- ☐ 110 kg
- ☐ 11 kg



- ☐ 1 kg
- ☐ 1 000 g
- ☐ 150 g
- ☐ 15 g

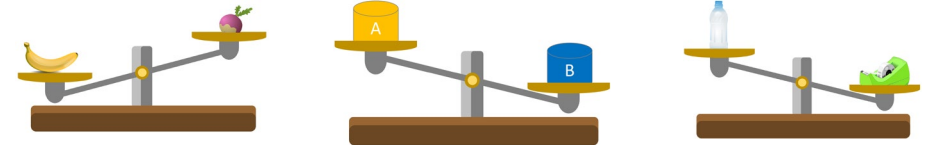


- ☐ 60 g
- ☐ 6 g
- ☐ 6 kg
- ☐ 600 g

Masses

Séance 60

→ Entoure l'objet le plus lourd.




→ Coche la réponse indiquant la masse de chaque objet.



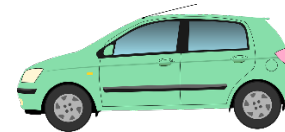
- ☐ 10 g
- ☐ 100 g
- ☐ 1 kg
- ☐ 10 kg



- ☐ 1 kg
- ☐ 100 g
- ☐ 10 g
- ☐ 1 g



- ☐ 15 kg
- ☐ 150 g
- ☐ 150 kg
- ☐ 1 kg



- ☐ 1 100 g
- ☐ 1 100 kg
- ☐ 110 kg
- ☐ 11 kg



- ☐ 1 kg
- ☐ 1 000 g
- ☐ 150 g
- ☐ 15 g



- ☐ 60 g
- ☐ 6 g
- ☐ 6 kg
- ☐ 600 g